

Here are this week's activities and challenges. Please just do what you can; there is no pressure to do it all. We would love to see any completed activities that our Year 2's do so feel free to email over any photos. Miss Judson will also put them on the website. ☺

Love Miss Laycock and Mrs Whitehead xx

Email: admin@westfieldinfants.co.uk

Phonics: Ordinal Numbers

Spellings: first second third fourth fifth sixth

You can put these spellings into some meaningful sentences as we do usually in a Monday Phonics writing session. These are ordinal numbers and are used when we talk about position.

My brother came first in a race at school.

Remember - not all sentences made have to be written down, some can be verbal.

Remember - Check your sentences back and edit anything that needs changing or adding.

Spelling Contract Activities:

	Activity	Points
1	Write each word 5 times	15
2	Write each word and circle all the vowels a,e,i,o, u	5
3	Write each word and circle all of the consonants. b,c,d,f,g,h,j,k,l,m,n,p,q,r,s,t,v,w,x,y,z	5
4	Write each word in order of length	10
5	Put the word in alphabetical order	10
6	Rainbow words - Write each word with a coloured crayon. Trace over each word using a different colour.	20
7	Ladder words - Example 'exit' e ex exi exit	10
8	Write each word in cursive script and make sure they sit on the line	10
9	Put each word into a meaningful sentence	20

Reading Comprehension:

Score

6

02-02-07-019-s

Name: _____

Subject: Year 2 Literacy

Date: _____

Sheet: Reading comprehension

DIPLODOCUS

(pronounced di-PLOD-o-kus)

Diet: Herbivore

Size: 30 m long

Period: Late Jurassic



Diplodocus was one of the longest land animals that ever lived. It had a long neck and a very long whip-like tail. The skull of Diplodocus was very small compared to the size of its body which could reach up to 30 m long and could weigh about 10 - 20 tons. Its nostrils were at the top of its head and it had peg-like teeth in the front of its jaws.

Diplodocus moved slowly on all four legs and had feet like an elephant with five toes on each foot. Its back legs were longer than its front legs.

Diplodocus lived in the Rocky Mountains.

Diplodocus means 'double beamed lizard'. Its backbone had extra bones underneath it.

Answer the questions below.

1. Did Diplodocus eat meat or plants? _____
2. Was the skull of Diplodocus large or small? _____
3. Where were the nostrils of Diplodocus? _____
4. Where did Diplodocus live? _____
5. In which period did Diplodocus live? _____
6. Did Diplodocus move slowly or quickly? _____



Predictions – What happens next in a story?

Birthday surprise

Tom was very excited today because it was his birthday. He was 8 years old and this afternoon he was having a birthday party for all of his friends. His mum and dad had arranged a special visitor to his party, but when he asked who or what it was, they just said “wait and see”.

Tom kept looking out of the window, waiting for his friends and the ‘special visitor’ to arrive.



Predict what will happen next in the story.






Writing



Look at the pictures. Can you write some sentences about each picture? You need to include adjectives in each sentence. You need to think about what might happen there and who could live there.

Colour Poetry

Think of a colour. Then think of all the things that are that colour or things that colour reminds you of. Next fill in the chart below. You need to draw 6 things that are that colour or that the colour reminds you of. I've done blue

Choose a colour and draw and label		
Sky 	Sea 	Denim Jeans 

Then see if you can write a poem using the idea below.

Blue is the bright sky with big white clouds.

Blue is the deep cold sea full of beautiful fish.

Blue is like the jeans hanging in my wardrobe.


Activity Chart

Can you fill in this chart over the week?

You need to record 4 activities each day in your chart. You need to do an activity inside, one outside, read or look at a book and play a game.


	Inside	Outside	Book	Game
Monday				
Tuesday				
Wednesday				
Thursday				
Friday				

Seaside Art



If you have an old shoe box or cardboard box at home, can you make a seaside scene in it?
You could also use an egg box.
You could use real sand if you have some or pebbles you might find on a walk!

Paper Sculptures



Gather together lots of bits of paper and cardboard and make a seaside scene or paper sculpture. You can bend, roll, fold or curl your paper.

Remember to email us any photos!

Name _____

Date _____



COUNTING ON BY 1s, 2s, 5s, 10s and 100s SHEET 1

Each of these sequences goes up by 1s, 2s, 5s, 10s or 100s.

1) Count on by 2s.

17	19		23		27		31
----	----	--	----	--	----	--	----

2) Count on by 5s

0		10			25	30	
---	--	----	--	--	----	----	--

3) Count on by 1s

		78			81		83
--	--	----	--	--	----	--	----

4) Count on by 10s

68	78		98			128	
----	----	--	----	--	--	-----	--

5) Count on by 100s

200		400			700		
-----	--	-----	--	--	-----	--	--

6) Count on by 2s

53		57		61	63		
----	--	----	--	----	----	--	--

7) Count on by 10s

66	76		96			126	
----	----	--	----	--	--	-----	--

8) Count on by 5s

30	35		45		55		
----	----	--	----	--	----	--	--

9) Count on by 100s

150		350			650	750	
-----	--	-----	--	--	-----	-----	--

10) Count on by 2s

	92		96	98			104
--	----	--	----	----	--	--	-----



Free Math Sheets, Math Games and Math Help

MATH-SALAMANDERS.COM



Name

Date



COMPARING NUMBERS TO 100 SHEET 3

> is greater than	< is less than	= is equal to
$10 > 7$	$3 < 6$	$7 = 7$

1) 9 ___ 7

11) 20 ___ 30

2) 12 ___ 5

12) 13 ___ 11

3) 14 ___ 14

13) 10 ___ 17

4) 11 ___ 15

14) 22 ___ 22

5) 12 ___ 13

15) 12 ___ 19

6) 17 ___ 8

16) 30 ___ 10

7) 10 ___ 14

17) 60 ___ 50

8) 16 ___ 16

18) 50 ___ 70

9) 20 ___ 16

19) 23 ___ 27

10) 14 ___ 18

20) 29 ___ 21



Free Math Sheets, Math Games and Math Help

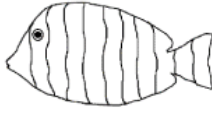





MATH-SALAMANDERS.COM

Name _____

Date _____




ORDINAL NUMBERS – FIND AND COLOR 6

					
fish	dog	rabbit	penguin	seahorse	cat

If the fish is the first animal...

- 1) Which animal is third? _____
- 2) What place is the seahorse in? _____
- 3) What place is the dog in? _____
- 4) Which animals is fourth? _____
- 5) Which animal is last? _____
- 6) Color the second animal brown.
- 7) Color the fourth animal grey.
- 8) Color the first animal red.
- 9) Color the 5th animal green.
- 10) Color the third animal black.
- 11) Color the sixth animal orange.



Research



Wimbledon is a big tennis competition which takes place in the UK in July. Can you find out about Wimbledon? Can you make a fact sheet with all the information you have found out? You can use the subheadings below.

Wimbledon

Where is it?

**Famous
Tennis
Players**

**How to Play
Tennis**

Wow Facts

D/T

Paper or Plastic Cups

What can you make with paper/plastic cups?



Have a lovely weekend 😊

Extra Sheets:

Wimbledon Fact Sheet Colour by Numbers Wimbledon Powerpoint