
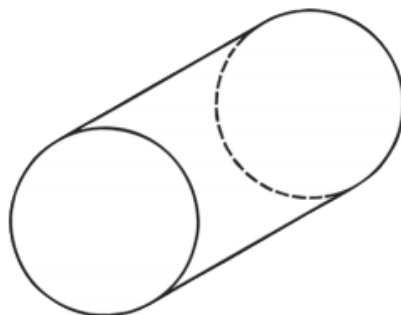


- Miss Gordons top tip: The mathematical language for corners is vertices.

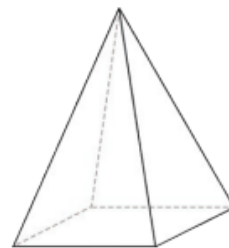
Name the 3D Shape



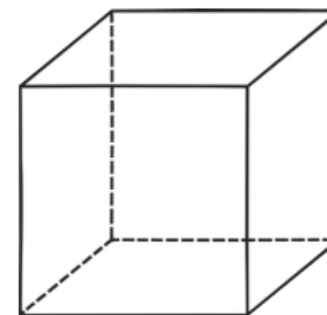
Shape of faces: _____
 Number of vertices: _____
 Number of edges: _____
 Name: _____



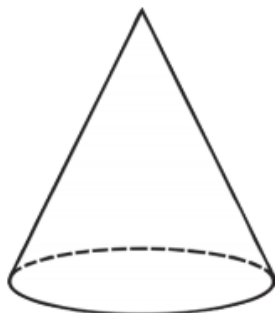
Shape of faces: _____
 Number of vertices: _____
 Number of edges: _____
 Name: _____



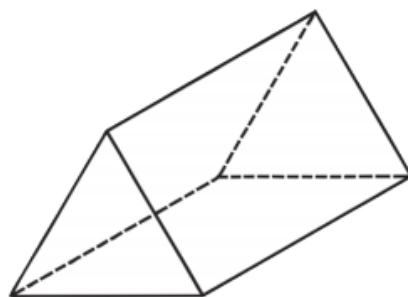
Shape of faces: _____
 Number of vertices: _____
 Number of edges: _____
 Name: _____



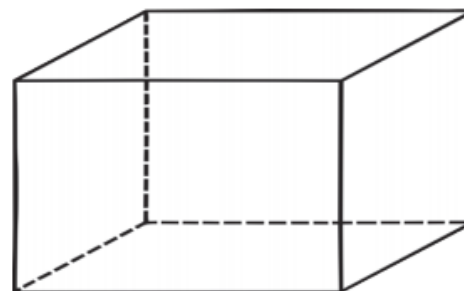
Shape of faces: _____
 Number of vertices: _____
 Number of edges: _____
 Name: _____



Shape of faces: _____
 Number of vertices: _____
 Number of edges: _____
 Name: _____



Shape of faces: _____
 Number of vertices: _____
 Number of edges: _____
 Name: _____



Shape of faces: _____
 Number of vertices: _____
 Number of edges: _____
 Name: _____

